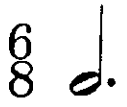


# 23.

 How many eighths are in a half note? \_\_\_\_\_  
How many eighth notes equal the dot for the half note? \_\_\_\_\_


A. 

B. 


C. 

D. 

E. 

F. 

G. 

H. 

I. 

J. 

K. 

L. 